

LESSON

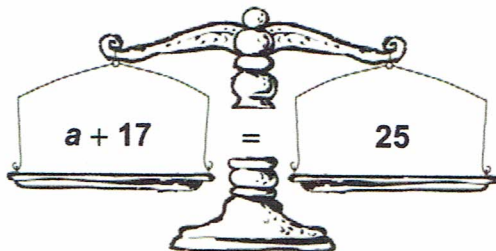
4

Introduction to Algebra

Challenge: Keep It Balanced

Study the scales below. Then circle the solution below each scale that will keep it balanced.

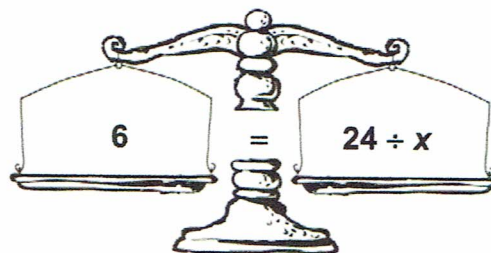
1.



$a = 8$

$a = 9$

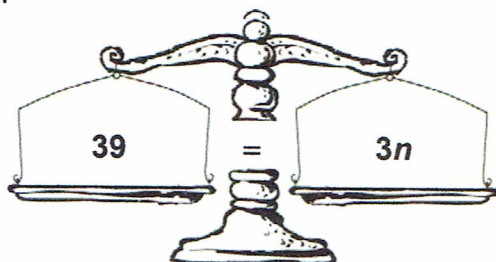
2.



$x = 3$

$x = 4$

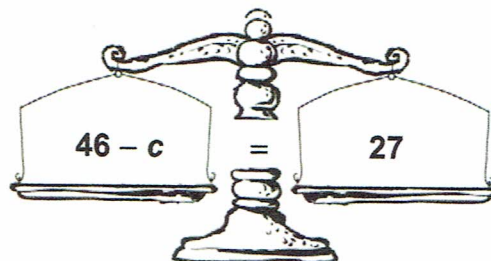
3.



$n = 12$

$n = 13$

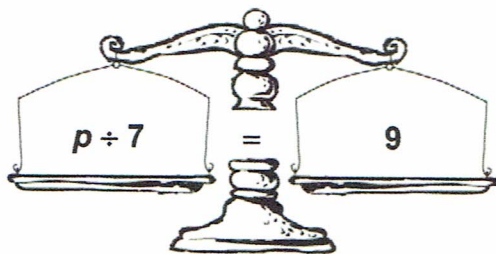
4.



$c = 19$

$c = 29$

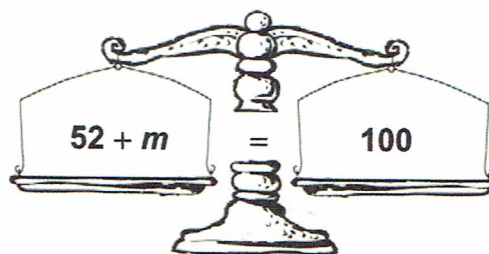
5.



$p = 49$

$p = 63$

6.



$m = 48$

$m = 58$