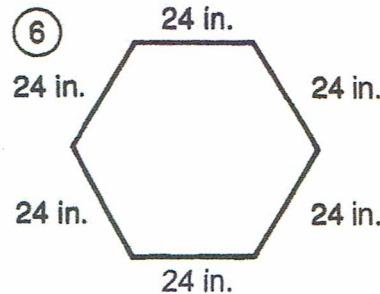
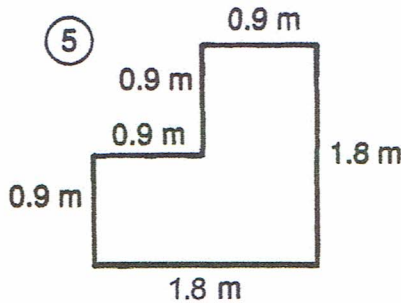
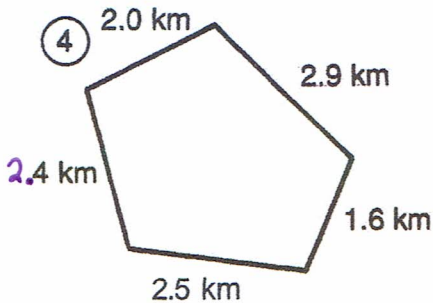
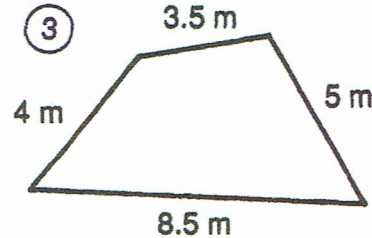
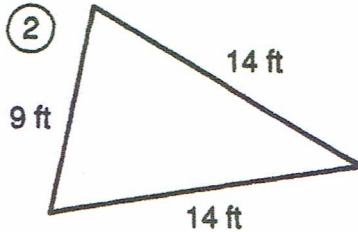
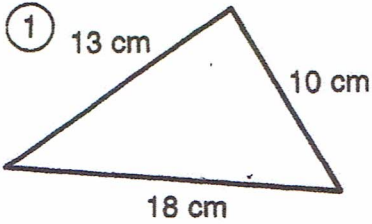
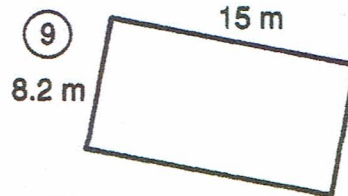

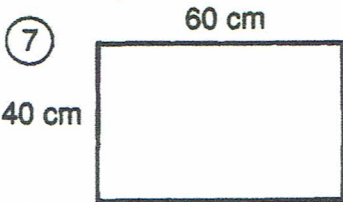


# Why Did the River Guide Carry a Rifle?

Find the PERIMETER of each figure. Cross out the box containing each correct answer. When you finish, write the letters from the remaining boxes in the spaces at the bottom of the page. *(Perimeter - add up all the sides.)*



Find the perimeter of each rectangle.



⑩  $l = 48 \text{ mm}$   
 $w = 32 \text{ mm}$

⑪  $l = 6.2 \text{ km}$   
 $w = 4.7 \text{ km}$

⑫  $l = 12 \text{ in.}$   
 $w = 12 \text{ in.}$

⑬ Find the perimeter of a sheet of typing paper  $8\frac{1}{2}$  in. wide and 11 in. long.

⑭ How many feet of border are needed to go around a square bulletin board that is 4.5 ft on each side?

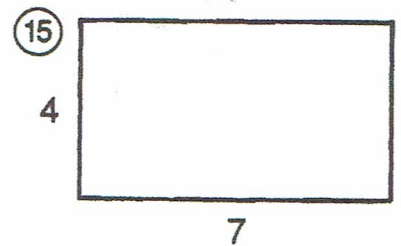

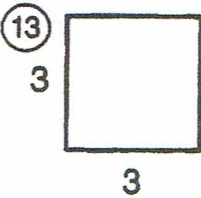
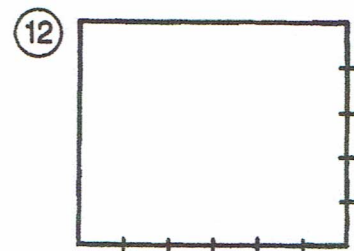
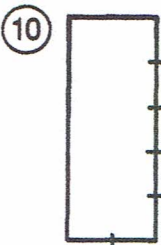
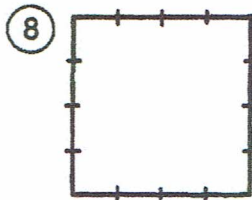

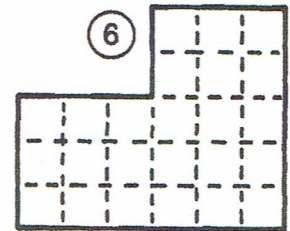

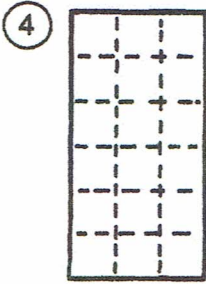

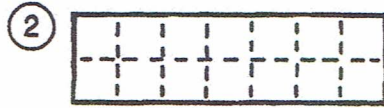
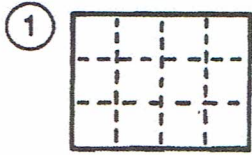
HE 48 in.	TO 43.4 m	ST 144 in.	SH 18.6 km	OT 18 ft	OP 21 m	FL 46.4 m	OO 156 in.	LS 37 ft	OA 160 mm	TT 32 ft
HE 180 cm	AT 35 ft	RA 184 mm	IN 21.8 km	TO 7.2 m	SO 41 cm	PI 42 in.	PE 200 cm	NG 39 in.	DS 156 in.	ET 11.4 km

AREA

# What Does a Tuba Call Its Father?

(FIND THE AREA)

Give the number of square units in each figure. Find your answer and cross out the letters above it. When you finish, the answer to the title question will remain.



TH	TU	GR	OO	BA	MI	BO	OM	MY	US	PA	IR	ST	OP	UB	PA	LS	AD	AD
32	15	9	42	20	12	28	21	44	18	8	45	24	14	16	27	30	46	10